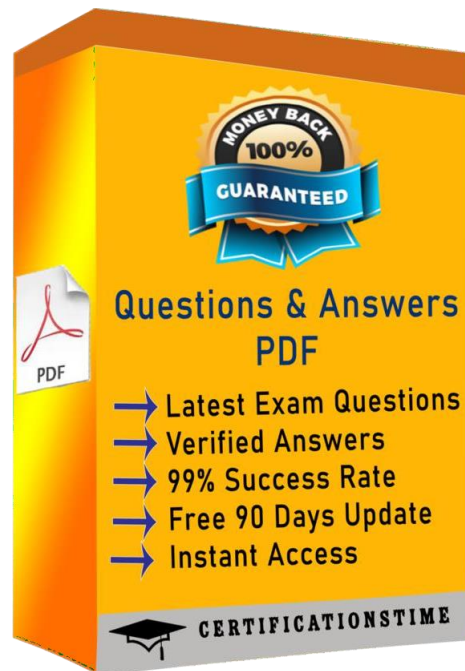




**The Open Group
OGO-023**

**The Open Group ArchiMate 2 Combined Part 1 and
2**

<https://certificationtime.com/>





Question 1

Which of the following best defines "architecture" in the context of the ArchiMate standard?

- A. A high-level summary of a system that is accessible to non-technical executives and other stakeholders
- B. A formal description of a system, or a detailed plan of the system at component level to guide its implementation
- C. A description of each component of a system in sufficient detail to ensure that the component is designed and built correctly in every respect
- D. An enumeration of the key concepts and philosophies that motivate and shape a major system

Correct Answer: B

Question 2

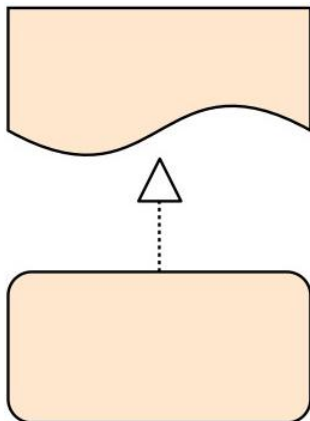
Which concept from the Motivation extension is most appropriate to represent a concern of one or more stakeholders?

- A. Assessment
- B. Driver
- C. Requirement
- D. Goal

Correct Answer: B

Question 3

Consider the following diagram:





Which of the following best describes what this diagram represents?

- A. A work package that realizes a deliverable
- B. A business process that realizes a representation
- C. A work package that realizes a gap
- D. A plateau that realizes a gap

Answer : A

Question 4

Consider the following diagram:

Which of the following best describes what this diagram represents?

- A. A device with two system software environments. Two artifacts are deployed in one system software environment, and one artifact is deployed in the other environment
- B. A node with two devices. Two artifacts are deployed in one device, and one artifact is deployed in the other device
- C. A node with two system software environments. Two artifacts are deployed in one system software environment, and one artifact is deployed in the other environment
- D. A node with two application components. Two artifacts are deployed in one application component, and one artifact is deployed in the other components

Answer : C

Question 5

The following is an example of an ArchiMate Goal Contribution view:

Which goals negatively influence other goals?

- A. Reduce expense ratio and Improve skills of claim processors
- B. Reduce customer service staff and Conduct trainings during working hours
- C. Reduce claim processing errors and Reduce expense ratio
- D. Improve skills of claim processors and Reduce customer service staff

Answer : A



Question 6

Which ArchiMate viewpoint is most suitable to show the realization of constraints by core elements?

- A. Requirements Realization viewpoint
- B. Implementation & Deployment viewpoint
- C. Goal Realization viewpoint
- D. Motivation viewpoint

Answer : A

Question 7

The PRO-FIT division of ArchiSurance has a new offering that is described by the following diagram:

Which of the following statements most accurately interprets this diagram?

- A. RepairMaster is a business product that includes three services and is used by three different roles
- B. RepairMaster is a business service that includes three products and is used by three different business actors
- C. RepairMaster is a business object that holds information about three different services, and is accessed by three different roles
- D. RepairMaster is a business product that delivers three different kinds of value to the three different roles that use it

Answer : A

Question 8

Consider the following statement:

1. An application component is a self-contained unit of functionality.
2. An application component may perform one or more application functions.
3. The name of an application component should preferably be a noun.

Which of the following answers regarding the statement is correct?

- A. 1 and 2 are correct, 3 is not correct
- B. 2 and 3 are correct, 1 is not correct
- C. 1 and 3 are correct, 2 is not correct

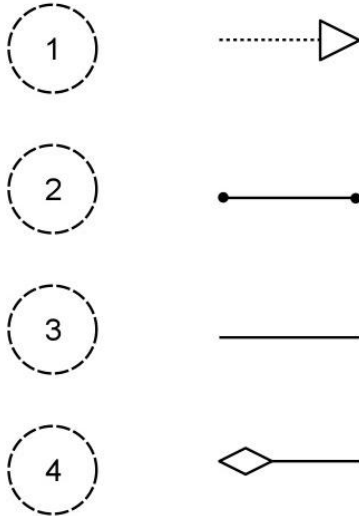


D. 1, 2 and 3 are all correct

Answer : D

Question 9

Consider the following four relationships, in the context of derived structural relationships:



Which of the following answers lists the four relationships ordered from the strongest relationship to the weakest relationship?

- A. 1, 2, 3, 4
- B. 1, 2, 4, 3
- C. 4, 2, 1, 3
- D. 4, 1, 2, 3

Answer : C

Full Access:

<https://certificationstime.com/updated/og0-023-exam-dumps-pdf/>